


SECOND GRADE

BLIZZARD BAG DAY 6



## 2<sup>nd</sup> Grade Blizzard Bag

### Directions Page

#### \*\*Day 6

#### Reading

- Read the story about George Washington and Abraham Lincoln and answer questions.
- Read the story about tornadoes and complete the tasks.

#### Language/Writing

- Complete the "Write About It" worksheet. Add details to your sentences!

#### Math

- Complete the word problems worksheet.
- Complete the "Lots of Spots" worksheet. Play the math game with someone in your home! A paperclip and pencil will work as your spinner. Use beans, pennies, etc... for the markers.

Name \_\_\_\_\_

Read the story below and complete the following page.



George Washington was the first president of the United States. He was born in 1732. That's over 250 years ago! George Washington was married to Martha Washington and had two stepchildren. He is the only president that did not live in our nation's capital, Washington, D.C. The capital is named after him.

Abraham Lincoln was the 16<sup>th</sup> president of the United States. He was born in 1809 in a log cabin in Kentucky. Lincoln was married to Mary Todd and had four sons. His nickname was "Honest Abe." Abraham Lincoln was president during the Civil War. He gave a very famous speech to say that all people are created equal.

Name \_\_\_\_\_

What are some things that are the SAME about George Washington and Abraham Lincoln?

---

---

---

---

---

---

What are some things that are DIFFERENT about George Washington and Abraham Lincoln?

---

---

---

---

---

---




Name \_\_\_\_\_

Read the story below and be prepared to retell the story.



Tornadoes can be very scary. You can protect yourself if a tornado is coming. First, watch the news and listen for a tornado warning. A tornado watch means that the weather is suitable for a tornado to form, but there is no tornado. A tornado warning means that a tornado has been spotted or there is a high chance of one forming. If there is a tornado warning, you need to go to a basement or an interior room with no windows. Do not go outside during a tornado warning. Listen to a radio to find out when it is safe to come out. You must be careful if you think a tornado is coming.

Name \_\_\_\_\_



What is the main topic of this story?

---

---

Retell the story in your own words.

---

---

---

---

---



---

---



Name: \_\_\_\_\_

# Write about it!

Made by Amy Lemons



Write sentences about the pictures. Use verbs in your sentences. Underline your verbs.



Name \_\_\_\_\_ Date \_\_\_\_\_

## Operations & Algebraic Thinking

2.OA.1

1. Marcus had 25 rocks in his collection. Then he found 14 more at recess. How many rocks does he have now?

2. 35 students bought lunch on Monday. 22 bought lunch on Tuesday. How many more students bought lunch on Monday?

3. 28 bluebirds were in the tree. Some owls joined them. Now there were 36 total birds in the tree. How many of them were owls?

4. 16 children were on the bus. Then 24 more children got on the bus. How many children were on the bus altogether?

5. Mr. Martin had some erasers. He gave away 24 to his class. He has 13 left. How many did he have before he gave any away?

6. Grandma baked some sugar cookies. She also baked 14 oatmeal cookies. Now she has 26 cookies altogether. How many are sugar cookies?

7. There were 26 children on the Dragons soccer team. 15 more children joined the team. Then 6 of those children moved to play for the Sharks. Now how many children are playing for the Dragons?

8. Ella had 16 crayons. Ava gave her 12 more. Then Ella gave 8 of her crayons to Jonathan. Now how many crayons did Ella have left?



# LOTS OF SPOTS

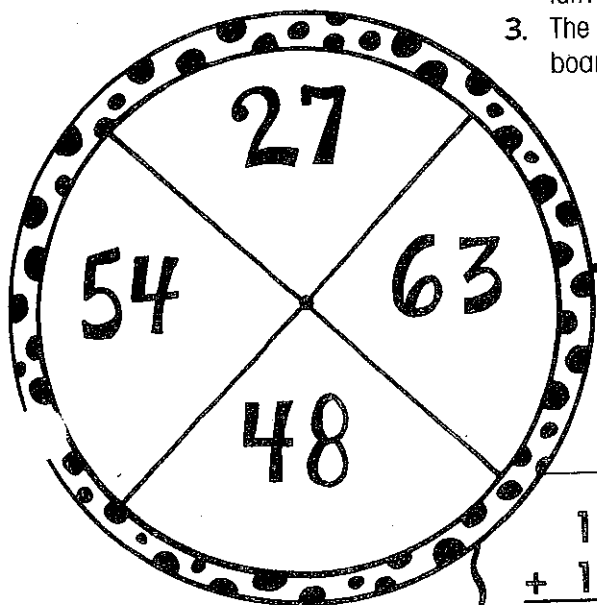

**SKILL:**  
Regrouping

**MATERIALS**

- game board
- paper clip for spinner
- 12 game markers (6 for each player)

**DIRECTIONS**

1. Players 1 and 2 take turns.
2. Spin the spinner to determine the answer. Place a marker on the number sentence on the game board that goes with the answer. If the number sentence is not available, your turn is over.
3. The first player to place 6 markers on the board wins.



				
	$\begin{array}{r} 18 \\ + 9 \\ \hline \end{array}$	$\begin{array}{r} 27 \\ + 27 \\ \hline \end{array}$	$\begin{array}{r} 36 \\ + 27 \\ \hline \end{array}$	$\begin{array}{r} 24 \\ + 24 \\ \hline \end{array}$
$\begin{array}{r} 14 \\ + 13 \\ \hline \end{array}$	$\begin{array}{r} 37 \\ + 17 \\ \hline \end{array}$	$\begin{array}{r} 44 \\ + 19 \\ \hline \end{array}$	$\begin{array}{r} 29 \\ + 19 \\ \hline \end{array}$	$\begin{array}{r} 32 \\ + 16 \\ \hline \end{array}$
$\begin{array}{r} 17 \\ + 46 \\ \hline \end{array}$	$\begin{array}{r} 19 \\ + 35 \\ \hline \end{array}$	$\begin{array}{r} 17 \\ + 10 \\ \hline \end{array}$	$\begin{array}{r} 34 \\ + 20 \\ \hline \end{array}$	$\begin{array}{r} 29 \\ + 34 \\ \hline \end{array}$
$\begin{array}{r} 21 \\ + 42 \\ \hline \end{array}$	$\begin{array}{r} 33 \\ + 15 \\ \hline \end{array}$	$\begin{array}{r} 39 \\ + 9 \\ \hline \end{array}$	$\begin{array}{r} 42 \\ + 12 \\ \hline \end{array}$	$\begin{array}{r} 11 \\ + 16 \\ \hline \end{array}$
$\begin{array}{r} 19 \\ + 8 \\ \hline \end{array}$	$\begin{array}{r} 53 \\ + 10 \\ \hline \end{array}$	$\begin{array}{r} 27 \\ + 21 \\ \hline \end{array}$	$\begin{array}{r} 12 \\ + 15 \\ \hline \end{array}$	$\begin{array}{r} 26 \\ + 28 \\ \hline \end{array}$